

Centre No.						Paper Reference						Surname	Initial(s)	
Candidate No.						6	6	7	8	/	0	1	Signature	

Paper Reference(s)

6678/01

Edexcel GCE

Mechanics M2

Advanced/Advanced Subsidiary

Thursday 31 May 2012 – Morning

Time: 1 hour 30 minutes

Examiner's use only

--	--	--

Team Leader's use only

--	--	--

Question Number	Leave Blank
1	
2	
3	
4	
5	
6	
7	
Total	

<u>Materials required for examination</u> Mathematical Formulae (Pink)	<u>Items included with question papers</u> Nil
--	--

Candidates may use any calculator allowed by the regulations of the Joint Council for Qualifications. Calculators must not have the facility for symbolic algebra manipulation or symbolic differentiation/integration, or have retrievable mathematical formulae stored in them.

Instructions to Candidates

In the boxes above, write your centre number, candidate number, your surname, initials and signature. Check that you have the correct question paper. Answer ALL the questions. You must write your answer to each question in the space following the question. Whenever a numerical value of *g* is required, take $g = 9.8 \text{ m s}^{-2}$. When a calculator is used, the answer should be given to an appropriate degree of accuracy.

Information for Candidates

A booklet 'Mathematical Formulae and Statistical Tables' is provided. Full marks may be obtained for answers to ALL questions. The marks for individual questions and the parts of questions are shown in round brackets: e.g. (2). There are 7 questions in this question paper. The total mark for this paper is 75. There are 24 pages in this question paper. Any blank pages are indicated.

Advice to Candidates

You must ensure that your answers to parts of questions are clearly labelled. You must show sufficient working to make your methods clear to the examiner. Answers without working may not gain full credit.

This publication may be reproduced only in accordance with Pearson Education Ltd copyright policy. ©2012 Pearson Education Ltd.



Turn over



Leave
blank

1. [In this question \mathbf{i} and \mathbf{j} are perpendicular unit vectors in a horizontal plane.]

A particle P moves in such a way that its velocity \mathbf{v} m s⁻¹ at time t seconds is given by

$$\mathbf{v} = (3t^2 - 1)\mathbf{i} + (4t - t^2)\mathbf{j}$$

(a) Find the magnitude of the acceleration of P when $t = 1$ (5)

Given that, when $t = 0$, the position vector of P is \mathbf{i} metres,

(b) find the position vector of P when $t = 3$ (5)



2. A particle P of mass $3m$ is moving with speed $2u$ in a straight line on a smooth horizontal plane. The particle P collides directly with a particle Q of mass $4m$ moving on the plane with speed u in the opposite direction to P . The coefficient of restitution between P and Q is e .

(a) Find the speed of Q immediately after the collision.

(6)

Given that the direction of motion of P is reversed by the collision,

(b) find the range of possible values of e .

(5)



3.

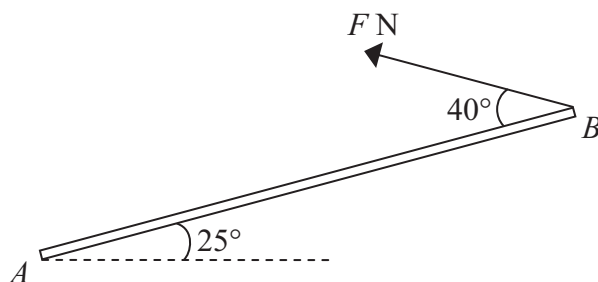


Figure 1

A uniform rod AB , of mass 5 kg and length 4 m, has its end A smoothly hinged at a fixed point. The rod is held in equilibrium at an angle of 25° above the horizontal by a force of magnitude F newtons applied to its end B . The force acts in the vertical plane containing the rod and in a direction which makes an angle of 40° with the rod, as shown in Figure 1.

- (a) Find the value of F . (4)
- (b) Find the magnitude and direction of the vertical component of the force acting on the rod at A . (4)



4.

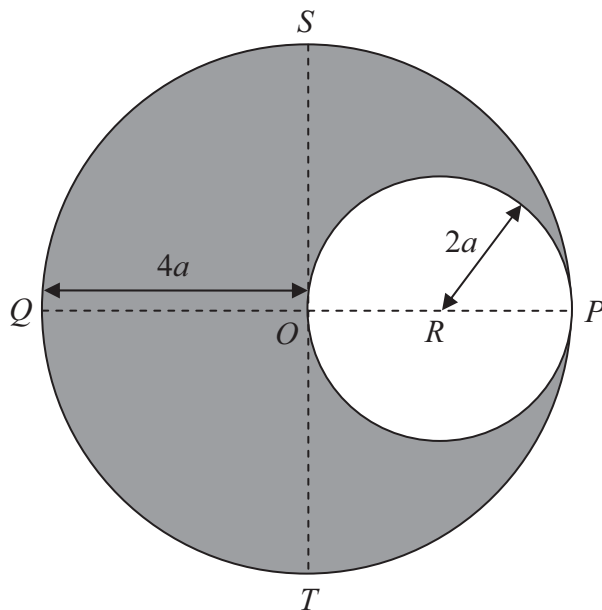


Figure 2

A uniform circular disc has centre O and radius $4a$. The lines PQ and ST are perpendicular diameters of the disc. A circular hole of radius $2a$ is made in the disc, with the centre of the hole at the point R on OP where $OR = 2a$, to form the lamina L , shown shaded in Figure 2.

(a) Show that the distance of the centre of mass of L from P is $\frac{14a}{3}$. (4)

The mass of L is m and a particle of mass km is now fixed to L at the point P . The system is now suspended from the point S and hangs freely in equilibrium. The diameter ST makes an angle α with the downward vertical through S , where $\tan \alpha = \frac{5}{6}$.

(b) Find the value of k . (5)



5.

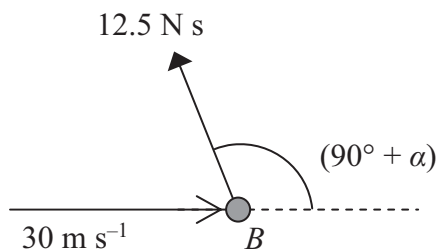


Figure 3

A small ball B of mass 0.25 kg is moving in a straight line with speed 30 m s^{-1} on a smooth horizontal plane when it is given an impulse. The impulse has magnitude 12.5 N s and is applied in a horizontal direction making an angle of $(90^\circ + \alpha)$, where $\tan \alpha = \frac{3}{4}$, with the initial direction of motion of the ball, as shown in Figure 3.

- (i) Find the speed of B immediately after the impulse is applied.
- (ii) Find the direction of motion of B immediately after the impulse is applied.

(6)



